

Roll Number

SET : A

INDIAN SCHOOL MUSCAT
FINAL TERM EXAMINATION
SOCIAL SCIENCE

CLASS: IX

Sub. Code: 087

Time Allotted: 3 Hrs

11.02.2019

Max. Marks: 80

General Instructions:

- Marks are indicated against each question.
- The question paper has 26 questions in all. All questions are compulsory.
- Questions from serial number 1 to 7 are very short answer type questions. Each question carries one mark.
- Questions from serial number 8 to 18 are 3 marks questions. Answer of these questions should not exceed 80 words each.
- Questions from serial number 19 to 25 are 5 marks questions. Answer of these questions should not exceed 100 words each.
- Q. Nos. 26 A-History and 26 B-Geography are map based questions. One Outline Map of France and one Outline Political Map India are provided. After completion of the work, attach the map inside your answer book.

SECTION A (1x7=7)

1. Which island countries are our southern neighbours? 1

OR

Name the southernmost point of Indian Union and state why it was submerged?

2. Who were Jadidists? 1

3. Name the leading English manufacturer, who sought to build a cooperative community called New Harmony in Indiana (USA). 1

4. Name the party formed by Robert Mugabe in Zimbabwe. 1

5. Define the term disguised unemployment. 1

6. How have the social scientists defined poverty? 1

OR

What do you understand by international poverty line?

7. What is social exclusion? 1

SECTION B (3x11=33)

8. What led to a “**subsistence crisis**” that occurred frequently in France during the Old Regime? 3

9. Examine the devastating impact of the First World War on Europe and Germany. 3

10. Classify the plate movements into three types and explain each briefly. 3

OR

What are Purvanchals? Give any two characteristic features of Purvanchal.

11. Climatic Data Analysis: Study the table and answer the questions given below: 3

Stations	Latitude	Altitude (Metres)	Jan	Feb.	Mar.	Apr.	May.	Jun.	Jul.	Aug.	Sep.	Oct.	Nov.	Dec.	Annual Rainfall
Kolkata Temperature (°C) Rainfall (cm)	22°34' N	6	19.6	22.0	27.1	30.1	30.4	29.9	28.9	28.7	28.9	27.6	23.4	19.7	
Delhi Temperature (°C) Rainfall (cm)	29° N	219	14.4	16.7	23.3	30.0	33.3	33.3	30.0	29.4	28.9	25.6	19.4	15.6	
			2.5	1.5	1.3	1.0	1.8	7.4	19.3	17.8	11.9	1.3	0.2	1.0	67.0

- a) Which station has higher range of temperature? Show calculation also.
b) Which station is located closer to equator? Show its value of location?
c) Which station receives higher annual rainfall and how much?
12. Evaluate any three features of 'apartheid' practiced in South Africa between 1948 and 1989. 3
13. Analyze any three challenges to free and fair elections. 3

OR

- 'It is good to have a political competition'. Justify the statement with three arguments.
14. 'Right to Freedom is a cluster of six freedoms'. Explain. ($6 \times \frac{1}{2} = 3$) 3
15. Modern farming methods require more inputs which are manufactured in industry. Do you agree? Explain. 3
16. Discuss the programmes and policies adopted by the Government of India (GOI) to improve the quality and reduce the high dropout rates in the primary school system. 3

OR

- Explain the virtuous and vicious cycle in educating children in India.
17. Describe any three current targeted anti-poverty programmes adopted by the Government of India. 3
18. What is Buffer Stock? Why does the government create it? 3

SECTION C (5x7=35)

19. Trace the factors responsible for the outbreak of the Enclosure Movement in England. 5
20. Explain the various events that led to the Revolution of 1905 in Russia. 5

OR

- Analyze the main events and effects of the February Revolution of 1917 in Russia. (3+2)
21. Why tropical evergreen forests appear green throughout the year? Give four important characteristic features of tropical evergreen forests 5
22. What is occupational structure? Explain the various activities of occupational structure. Give reason for occupation shift in different activities. 5
23. Discuss any five powers and functions of the Prime Minister of India. 5
24. Enumerate any five features of Indian Secularism. 5
25. Briefly describe the (PDS) "Public Distribution System". Examine the functioning of Ration Shops or Fair price Shops in India. (2+3) 5

SECTION D (1x5=5)

26. **History Map:** 2
- A On the given outline **map of France**, label and locate the following with appropriate symbols: (1+1)
- a) Bordeaux
b) Marseilles

26. **Geography Map:**

3

B Label and locate the following with appropriate symbols on the same given outline **map of India**.

(1+1+1)

1. Kanchenjunga Mountain Peak,

2. Chilika Lake

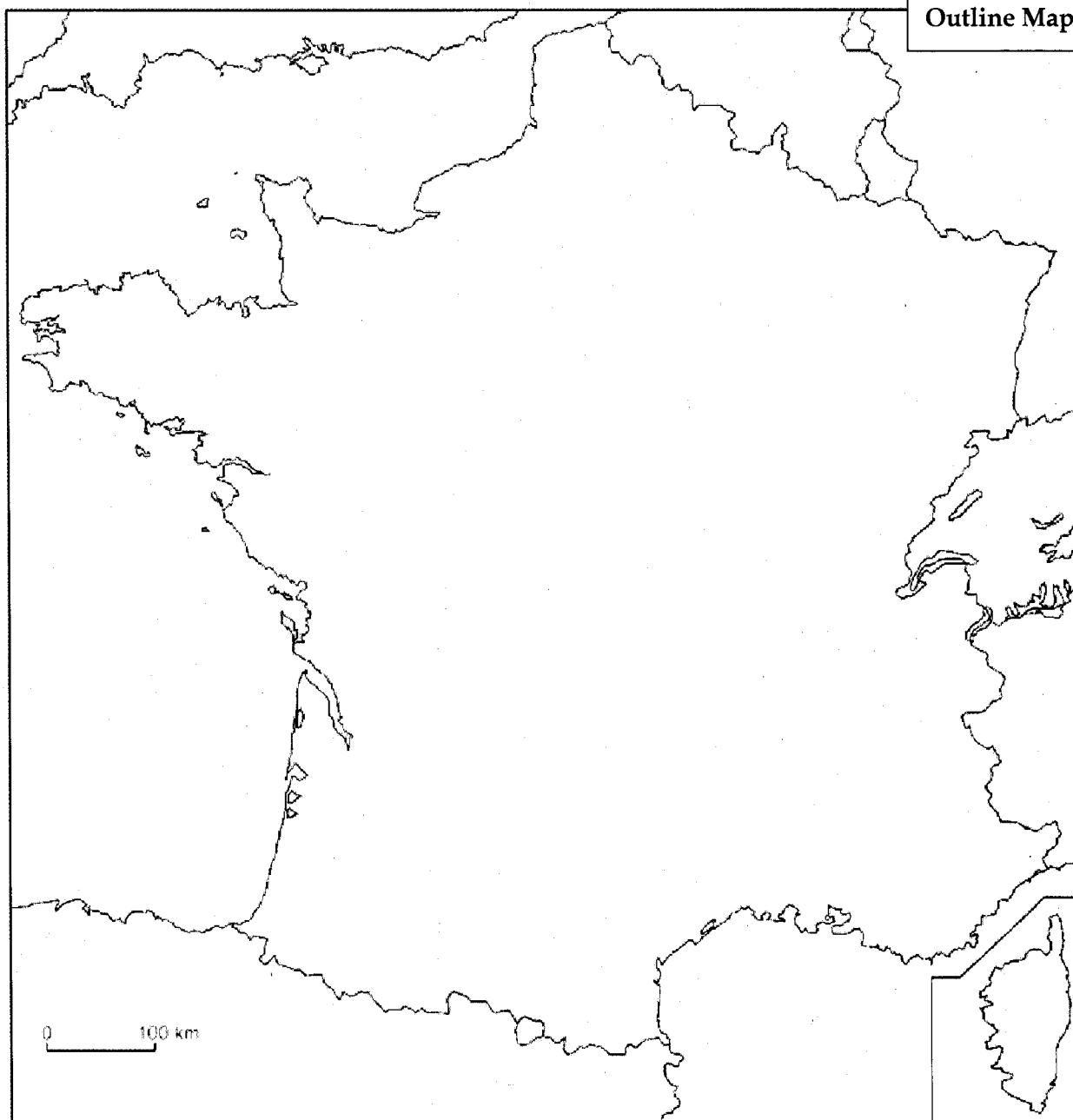
3 A State with the highest density of population in the year 2011

Class-IX, Sec.:

Map Q. 26 A **Final Term Exam**

Sign. of invigilator:

Roll No.:



Class-IX, Sec.:

Roll No.:

Sign. of invigilator:

Map Q. 26 B

Final Term Exam. Feb. 2019

Outline Political Map of India



Roll Number

SET: B

INDIAN SCHOOL MUSCAT
FINAL TERM EXAMINATION
SOCIAL SCIENCE

CLASS: IX

Sub. Code: 087

Time Allotted: 3 Hrs

11.02.2019

Max. Marks: 80

General Instructions:

- i. Marks are indicated against each question.
- ii. The question paper has 26 questions in all. All questions are compulsory.
- iii. Questions from serial number 1 to 7 are very short answer type questions. Each question carries one mark.
- iv. Questions from serial number 8 to 18 are 3 marks questions. Answer of these questions should not exceed 80 words each.
- v. Questions from serial number 19 to 25 are 5 marks questions. Answer of these questions should not exceed 100 words each.
- vi. Q. Nos. 26 A-History and 26 B-Geography are map based questions. One Outline Map of France and one Outline Political Map India are provided. After completion of the work, attach the map inside your answer book.

SECTION A (1x7=7)

1. What is the total area of India? What percentage does it constitute of the world's total area 1

OR

Give the total Length of the land boundary and the coastal line of India.

2. What is Suffragette movement? 1
3. Who were Kulaks? 1
4. Why modern democracies are called representative democracy? Write any one reason. 1
5. What is meant by the human capital formation? 1
6. What is the accepted average calories requirement in rural and urban India? 1

OR

How have the social scientists defined poverty?

7. What is social exclusion? 1

SECTION B (3x11=33)

8. Evaluate the significance of the French Constitution of 1791? 3
9. Point out the terms and conditions of the Treaty of Versailles. Why was it unjust and harsh to Germany? 3
10. Give an account of the Northern Plains of India. 3

OR

Distinguish between the Western Ghats and the Eastern Ghats under the following points:

1. Location 2. Altitude 3. Highest peaks

11. Climatic Data Analysis: Study the table and answer the questions given below:

3

Stations	Latitude	Altitude (Metres)	Jan	Feb.	Mar.	Apr.	May.	Jun.	Jul.	Aug.	Sep.	Oct.	Nov.	Dec.	Annual Rainfall
Kolkata	22°34' N	6	19.6	22.0	27.1	30.1	30.4	29.9	28.9	28.7	28.9	27.6	23.4	19.7	
Delhi	29° N	219	14.4	16.7	23.3	30.0	33.3	33.3	30.0	29.4	28.9	25.6	19.4	15.6	
			1.2	2.8	3.4	5.1	13.4	29.0	33.1	33.4	25.3	12.7	2.7	0.4	162.5
			2.5	1.5	1.3	1.0	1.8	7.4	19.3	17.8	11.9	1.3	0.2	1.0	67.0

- Which station has lower range of temperature? Show calculation also.
- Which station is located on higher altitude? Mention the value of altitude.
- Which station receives lower annual rainfall and how much?

12. Explain any three the factors contributed towards the making of Indian Constitution.

3

13. Discuss any three minimum conditions required for a democratic election.

3

OR

‘It is not good to have a political competition’. Justify the statement with three arguments.

14. ‘Reservations are not violations to the Right to Equality’. Justify the statement with relevant arguments.

3

15. Explain any three factors of production.

3

16. “Unemployment has a detrimental impact on the overall growth of an economy”. Justify the statement with any two examples.

3

OR

Discuss the programmes and policies adopted by the Government of India (GOI) to improve the quality and reduce the high dropout rates in the primary school system.

17. Define the term ‘Poverty line’. How is the poverty line determined in India?

1+2=3

18. What is food security? Why do we need to ensure food security in India?

1+2=3

SECTION C (5x7=35)

19. Trace the factors responsible for the outbreak of the Enclosure Movement in England.

5

20. Analyze the main events and effects of the October Revolution of 1917 in Russia.

5

OR

Explain the various events that led to the Revolution of 1905 in Russia.

21. When was wild life conservation act implemented? Explain the various steps to conserve the Flora and Fauna in our country

5

22. Define Age Composition. Explain the different categories of age compositions. State the categories which are part of dependency ratio.

5

23. Explain any five functions of the Indian Parliament.

5

24. Enumerate any five features of Indian Secularism.

5

25. Briefly describe the (PDS) “Public Distribution System”. Examine the functioning of Ration Shops or Fair price Shops in India. (2+3)

5

SECTION D (1X5=5)

26. **History Map:**

2

- A On the given outline **map of France**, label and locate the following with appropriate symbols:
(1+1)

a) Nantes

b) Paris

26. **Geography Map:**

B Label and locate the following with appropriate symbols on the same given outline **map of India**. (1+1+1)

1. Aravalli Hills

2. Vembanad Lake

3. A State with the Lowest Density of Population in the year 2011

Class-IX, Sec.:

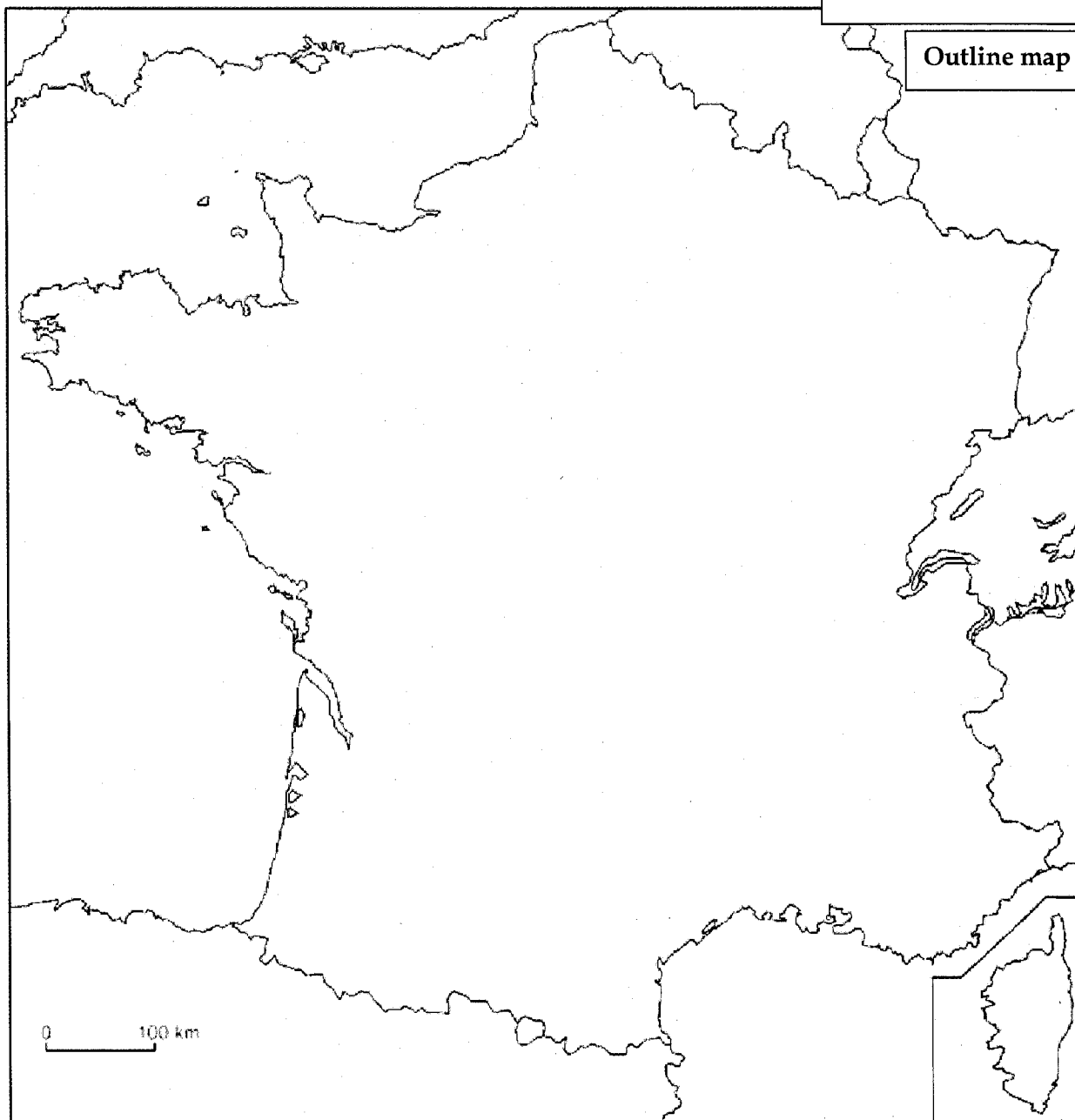
Roll No.:

Sign. of invigilator:

Map Q. 26 A

Final Term Exam. Feb. 2019

Outline map of France



Class-IX, Sec.:

Roll No.:

Sign. of invigilator:

Map Q. 26 B

Final Term Exam

Outline political map of India



End of the Question Paper

Q/P

Roll Number

SET: C

**INDIAN SCHOOL MUSCAT
FINAL TERM EXAMINATION
SOCIAL SCIENCE**

CLASS: IX

Sub. Code: 087

Time Allotted: 3 Hrs

11.02.2019

Max. Marks: 80

General Instructions:

- i. Marks are indicated against each question.
- ii. The question paper has 26 questions in all. All questions are compulsory.
- iii. Questions from serial number 1 to 7 are very short answer type questions. Each question carries one mark.
- iv. Questions from serial number 8 to 18 are 3 marks questions. Answer of these questions should not exceed 80 words each.
- v. Questions from serial number 19 to 25 are 5 marks questions. Answer of these questions should not exceed 100 words each.
- vi. Q. Nos. 26 A-History and 26 B-Geography are map based questions. One Outline Map of France and one Outline Political Map India are provided. After completion of the work, attach the map inside your answer book.

SECTION A (1x7=7)

1. Name the Straits that separate Sri Lanka from India. 1

OR

Give the Latitudinal Extent of India.

2. Name the leading English manufacturer, who sought to build a cooperative community called New Harmony in Indiana (USA). 1
3. What is Suffragette movement? 1
4. Write any one merit of democracy. 1
5. Define the term disguised unemployment. 1
6. What do you understand by international poverty line? 1

OR

What is the accepted average calories requirement in rural and urban India?

7. What is social exclusion? 1

SECTION B (3x11=33)

8. State any three reasons why the period from 1793 to 1794 in France is referred to as the Reign of Terror. 3
9. Point out the challenges faced by the Weimar Republic. Why was it not well received by the people? 3
10. Name the three river systems that have led to the formation of the northern plains. 3

OR

Distinguish between Bhangar and Khadar plains on the basis of the following:

a) Basis, b) Bhangar plain, c) Khadar plain

11. Climatic Data Analysis: Study the table and answer the questions given below:

3

Stations	Latitude	Altitude (Metres)	Jan	Feb.	Mar.	Apr.	May.	Jun.	Jul.	Aug.	Sep.	Oct.	Nov.	Dec.	Annual Rainfall
Temperature (°C)	22°34' N	6	19.6	22.0	27.1	30.1	30.4	29.9	28.9	28.7	28.9	27.6	23.4	19.7	
Kolkata Rainfall (cm)			1.2	2.8	3.4	5.1	13.4	29.0	33.1	33.4	25.3	12.7	2.7	0.4	162.5
Temperature (°C)	29° N	219	14.4	16.7	23.3	30.0	33.3	33.3	30.0	29.4	28.9	25.6	19.4	15.6	
Delhi Rainfall (cm)			2.5	1.5	1.3	1.0	1.8	7.4	19.3	17.8	11.9	1.3	0.2	1.0	67.0

- Which Station has Higher range of Temperature? Show calculation also.
- Which Station is located far from the Equator? Show the value of location.?
- Which Station receives Higher Annual Rainfall and how much?

12. Why do we need a constitution? Explain any three reasons.

3

13. What does our election law say? Explain.

3

OR

Analyze any three challenges to free and fair elections.

14. Which fundamental right is called the 'Heart and Soul' of the Indian Constitution and why? Who said this? Why? Explain. (1+1+1)

3

15. What are the different ways of increasing agricultural production on the same piece of land? Explain any two points with examples.

3

16. Explain the virtuous and vicious cycle in educating children in India.

3

OR

Suggest any three measures in the educational system to mitigate the problems of the educated unemployed?

17. Discuss any three causes of poverty in India.

3

18. How is food security ensured in India? Explain with examples.

3

SECTION C (5x7=35)

19. Trace the factors responsible for the outbreak of the Enclosure Movement in England.

5

20. Discuss the main changes brought about by the Bolsheviks immediately after the October Revolution of 1917 in Russia.

5

OR

Assess the steps taken by the Bolsheviks to make Russia a socialist society.

21. Why Tropical Evergreen Forests appear green throughout the year? Give four important Characteristic Features of Tropical Evergreen Forests

5

22. What is occupational structure? Explain the various activities of occupational structure. Give reason for occupation shift in different activities.

5

23. What is judiciary? What are the different levels of Indian Judiciary? Briefly explain any two jurisdictions of the Supreme Court of India. (1+1+3)

5

24. Enumerate any five features of Indian Secularism.

5

25. Briefly describe the (PDS) "Public Distribution System". Examine the functioning of Ration Shops or Fair price Shops in India. (2+3)

5

SECTION D (1x5=5)

26. **History Map:**

2

- A On the given outline map of France, label and locate the following with appropriate symbols:
(1+1)
a) Paris
b) Bordeaux

26. Geography Map: Label and locate the following with appropriate symbols on the same given

3

- B outline map of India. (1+1+1)
1. Garo-Khasi-Jaintia Hills ,
2. Chilika lake
3. State with Lowest Sex Ratio

Sign. of invigilator:

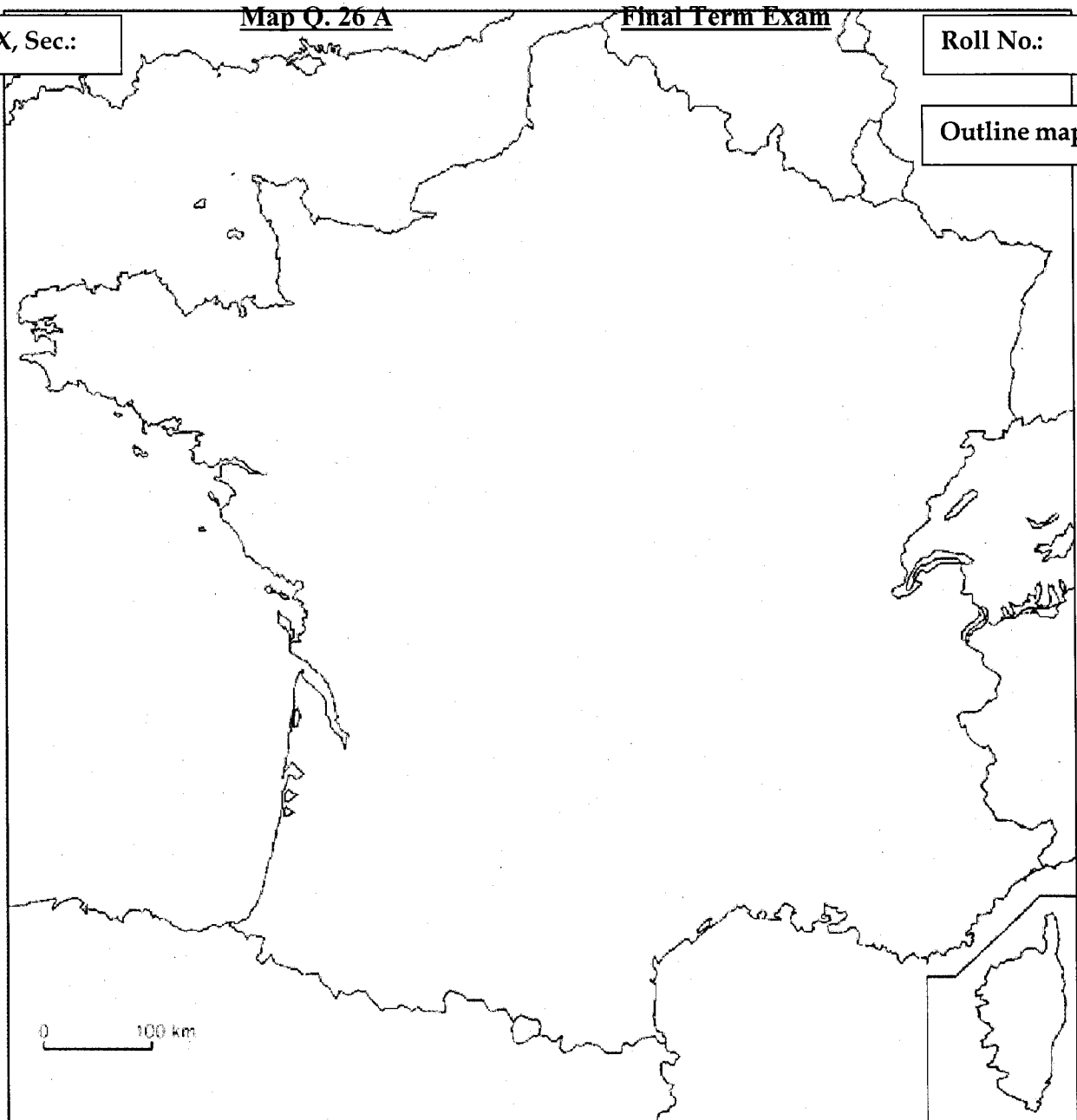
Class-IX, Sec.:

Map Q. 26 A

Final Term Exam

Roll No.:

Outline map of France



Class-IX, Sec.:

Roll No.:

Sign. of invigilator:

Map Q. 26 B

Final Term Exam. Feb. 2019

Outline political map of India



End of the Question Paper